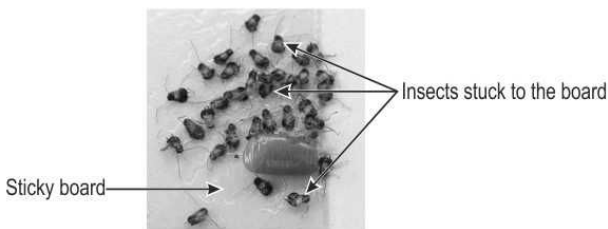




- 1** The picture shows a board with sticky glue on one side. When insects like ants or cockroaches walk over the board, they get stuck to it and are trapped.



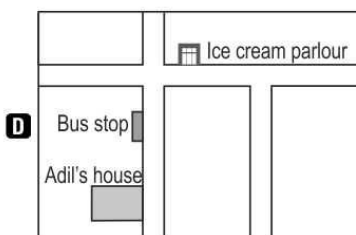
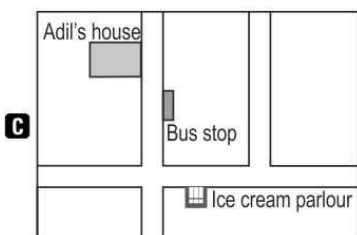
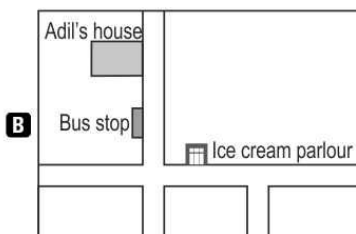
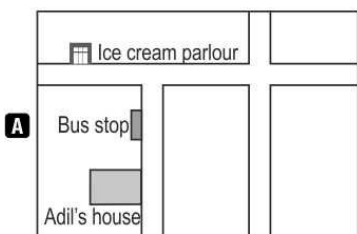
Which of the following animals also catches insects for its food by trapping them?

- A. squirrels
- B. spiders
- C. bees
- D. ants

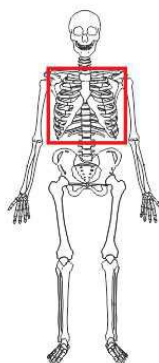
- 2** Read the route that Adil takes and answer the following question.

1. Adil steps out of his house and turns left.
2. He walks for some distance and reaches a bus stop.
3. After the bus stop, he turns right, walks straight ahead and reaches an ice cream parlour.

Which of the following maps is correct based on the route Adil takes?



- 3** Bones act like a shield to protect body parts from injury and damage. Shown here is a human skeleton.



Which part of the body do the bones marked in the box protect?

- A. only the heart
- B. only the lungs
- C. only the heart and lungs
- D. only the heart, lungs and intestine

- 4** Priyanka is standing in a room. There is only one light bulb as shown. Of the four shadows shown, which is the correct one?

